



INDIAN SCHOOL NIZWA
WORKSHEET- CH 11 TIME

Name : _____ Date: _____ Class ____ Sec ____

I. Choose the right answer from the brackets and fill in the blanks:

(Friday, Seven , December , November)

1. _____ is the last month of the year.
2. _____ day comes after Thursday .
3. Children's day is celebrated in the month of _____.
4. There are _____ days in a Week.

Draw hour hand and minute hand for the given time :



8 o 'Clock



10: 00

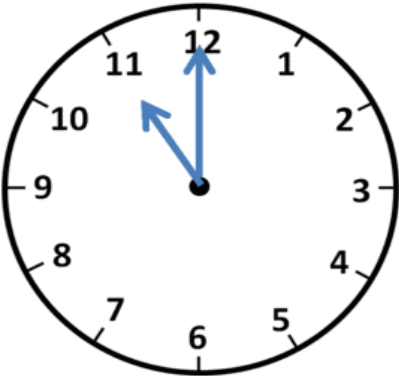
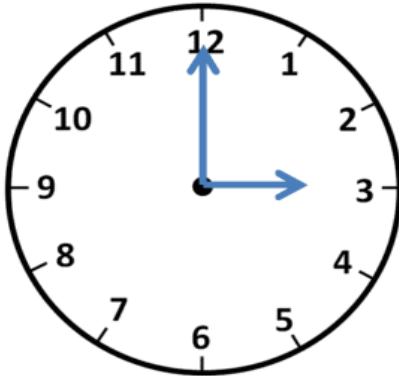
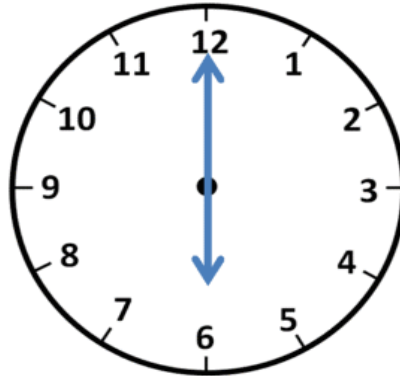
III. What time is it when:

- a) The hour hand is at 3 and minute hand is at 12? _____
- b) Both the hour hand and minute hand are at 12 ? _____
- c) The hour hand is at 6 and minute hand is at 12 ? _____

IV. What time of the day is it : Morning , noon , evening and night:

- a) Having Lunch: _____
- b) We can see the stars at _____
- c) Playing with friends _____
- d) Having Breakfast _____

IV. Write the time :

		
_____ o'clock	_____ o'clock	_____ o'clock